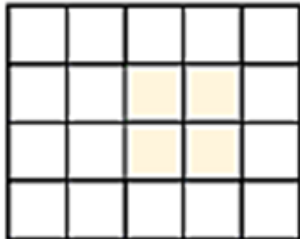


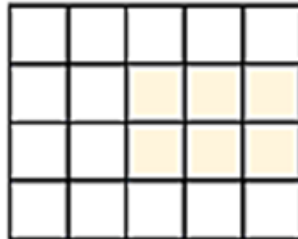
NAME: _____

AREA OF A RECTANGLE

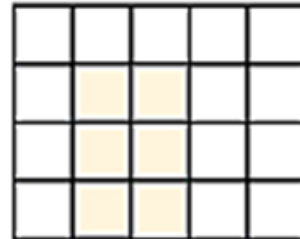
What is the area of the grey shape? Each square is one square unit of area.



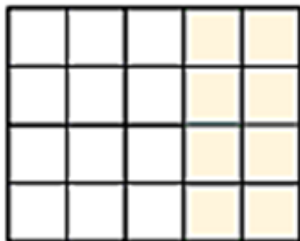
_____ square units



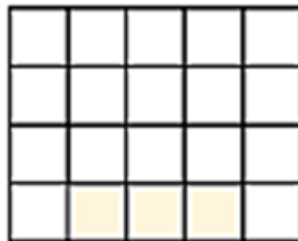
_____ square units



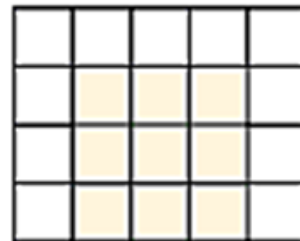
_____ square units



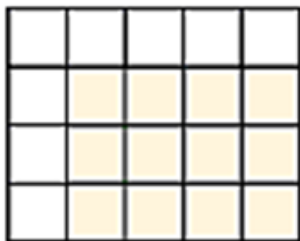
_____ square units



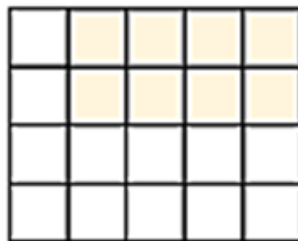
_____ square units



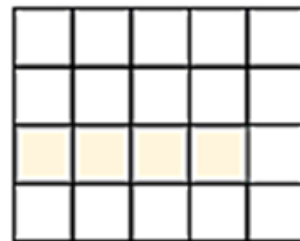
_____ square units



_____ square units



_____ square units



_____ square units

How Did You Do? 😊 😐 😞