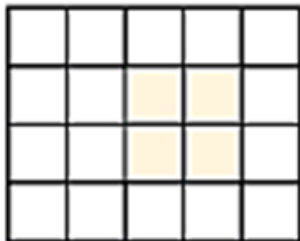


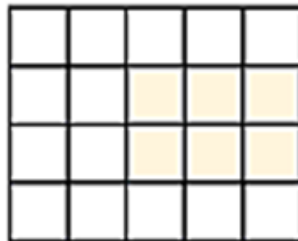
NAME: _____

AREA OF A RECTANGLE

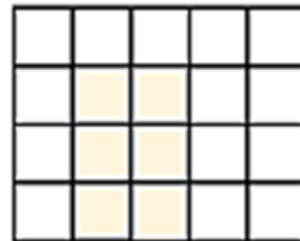
What is the area of the grey shape? Each square is one square unit of area.



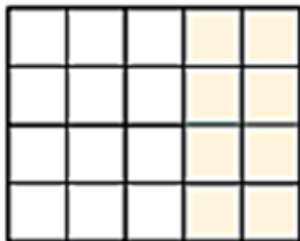
4 square units



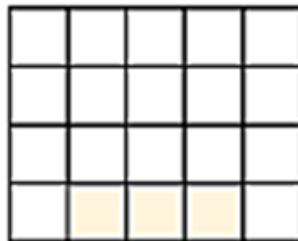
6 square units



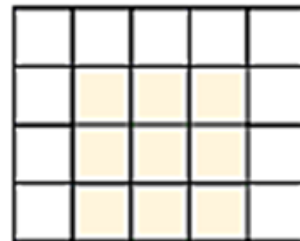
6 square units



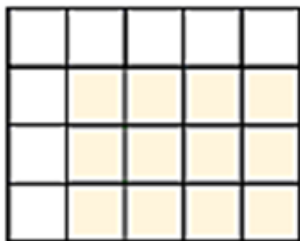
8 square units



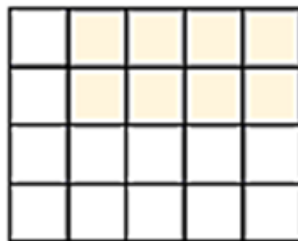
3 square units



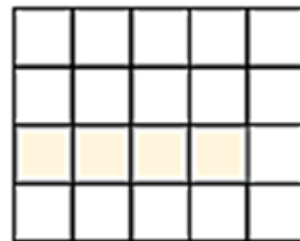
9 square units



12 square units



8 square units



4 square units

How Did You Do? 😊 😐 😞