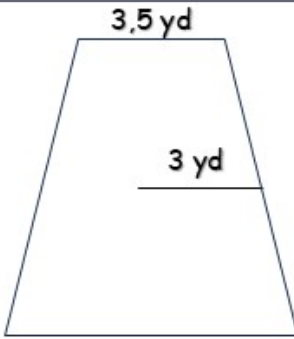


ANSWERS

AREA OF POLYGONS

Instructions Complete the mathematical formula according to each polygon to find its area.

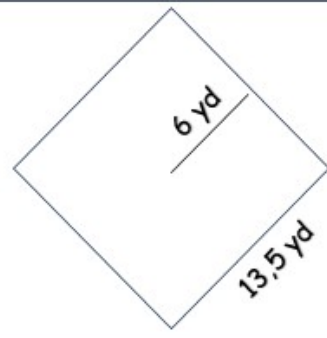


Perimeter = ns × sl

14 yd
 4
 3,5 yd

Area = $\frac{1}{2}$ × apothem × perimeter

21 yd²
 0,5
 3 yd
 14 yd

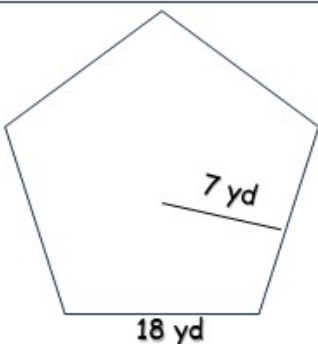


Perimeter = ns × sl

54 yd
 4
 13,5 yd

Area = $\frac{1}{2}$ × apothem × perimeter

162 yd²
 0,5
 6 yd
 54 yd



Perimeter = ns × sl

90 yd
 5
 18 yd

Area = $\frac{1}{2}$ × apothem × perimeter

315 yd²
 0,5
 7 yd
 90 yd

How Did You Do? 😊 😐 ☹️