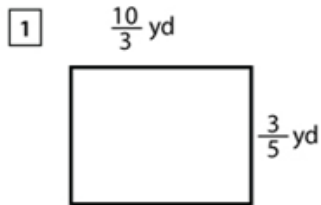


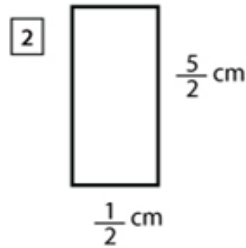
NAME: _____

AREA OF A RECTANGLE

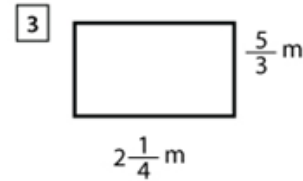
Area of a Rectangle with Fractions



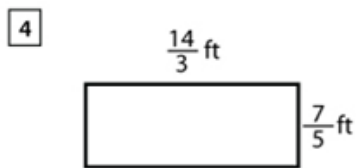
Area = 2 yd²



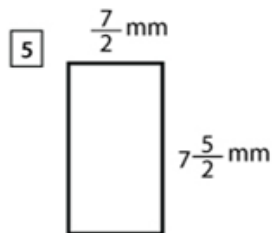
Area = 1 $\frac{1}{4}$ cm²



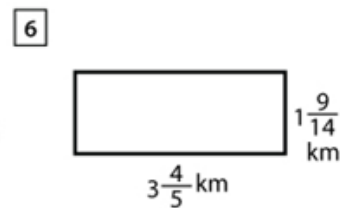
Area = 3 $\frac{3}{4}$ m²



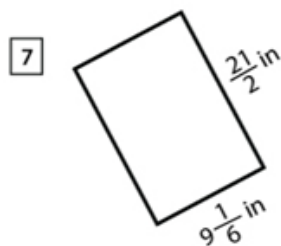
Area = 6 $\frac{8}{15}$ ft²



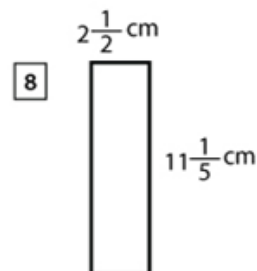
Area = 33 $\frac{1}{4}$ mm²



Area = 6 $\frac{17}{70}$ km²



Area = 96 $\frac{1}{4}$ in²



Area = 28 cm²

How Did You Do? 😊 😐 ☹️