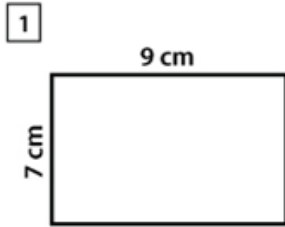
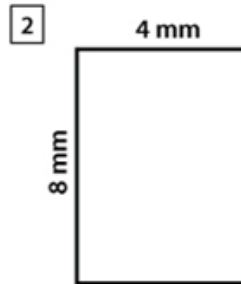


NAME: _____

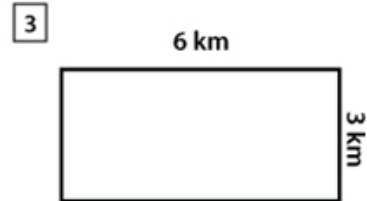
AREA OF A RECTANGLE



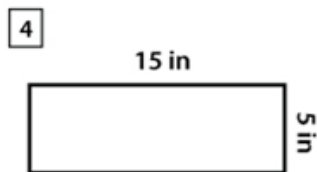
Area = 63 cm²



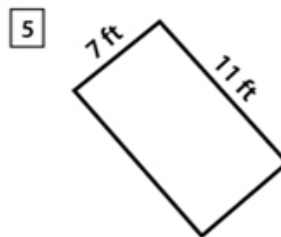
Area = 32 mm²



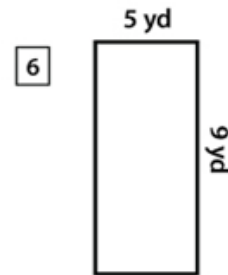
Area = 18 km²



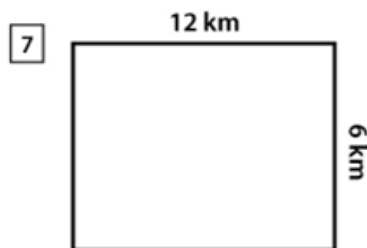
Area = 75 in²



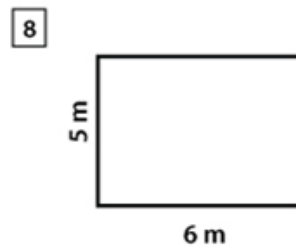
Area = 77 ft²



Area = 45 yd²



Area = 72 km²



Area = 30 m²

How Did You Do? 😊 😐 ☹️