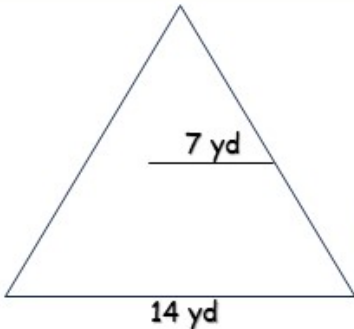


ANSWERS

AREA OF POLYGONS

Instructions Complete the mathematical formula according to each polygon to find its area.

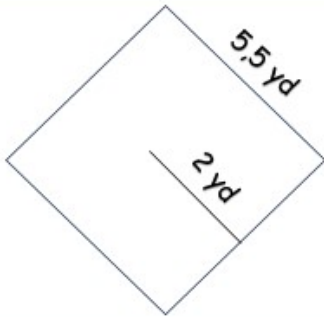


Perimeter = ns × sl

42 yd = 3 × 14 yd

Area = $\frac{1}{2}$ × apothem × perimeter

147 yd² = 0,5 × 7 yd × 42 yd

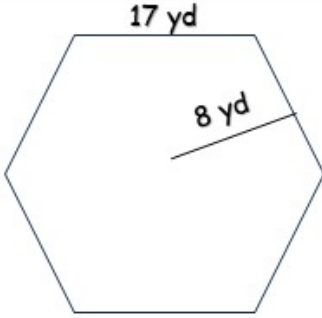


Perimeter = ns × sl

22 yd = 4 × 5,5 yd

Area = $\frac{1}{2}$ × apothem × perimeter

22 yd² = 0,5 × 2 yd × 22 yd



Perimeter = ns × sl

102 yd = 6 × 17 yd

Area = $\frac{1}{2}$ × apothem × perimeter

408 yd² = 0,5 × 8 yd × 102 yd

How Did You Do? 😊 😐 😞