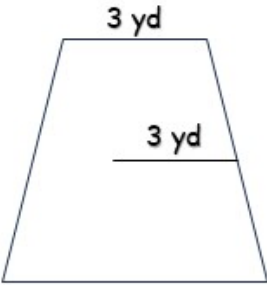


ANSWERS

AREA OF POLYGONS

Instructions Complete the mathematical formula according to each polygon to find its area.

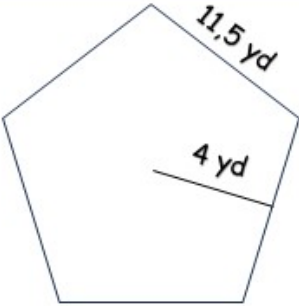


Perimeter = ns × sl

12 yd = 4 × 3 yd

Area = $\frac{1}{2}$ × apothem × perimeter

18 yd² = 0,5 × 3 yd × 12 yd

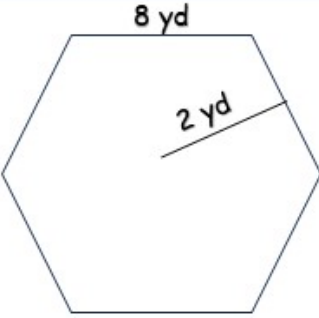


Perimeter = ns × sl

57,5 yd = 5 × 11,5 yd

Area = $\frac{1}{2}$ × apothem × perimeter

115 yd² = 0,5 × 4 yd × 57,5 yd



Perimeter = ns × sl

48 yd = 6 × 8 yd

Area = $\frac{1}{2}$ × apothem × perimeter

48 yd² = 0,5 × 2 yd × 48 yd

How Did You Do? 😊 😐 😞