




ANSWERS

AREA OF SQUARES

Instructions: Find the area of the square by multiplying side by side and express the result with exponent 2:

a) Each side of the square is 9cm	Solution: $9 \text{ cm} * 9 \text{ cm} = 81\text{cm}^2$ Area= <input type="text" value="81cm2"/>	
-----------------------------------	--	---

b) Each side of the square is 71m	Solution: $71 \text{ m} * 71 \text{ m} = 5041\text{m}^2$ Area= <input type="text" value="5041m2"/>	
-----------------------------------	--	--

c) Each side of the square is 84km	Solution: $84\text{km} * 84\text{km} = 7056\text{km}^2$ Area= <input type="text" value="7056km2"/>	
------------------------------------	--	---

SQUARES

How Did You Do? 