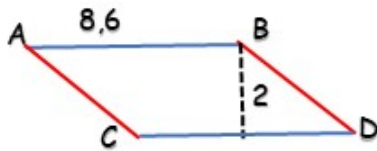


NAME: \_\_\_\_\_

# AREA OF PARALLELOGRAM


Instructions calculate the area of the parallelogram, coloring the correct answer:



17,2

1,72

172



285

2,85

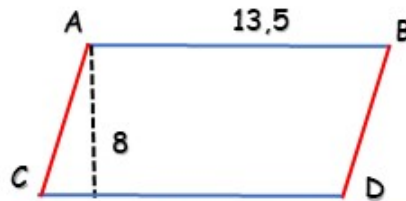
28,5



12

1,2

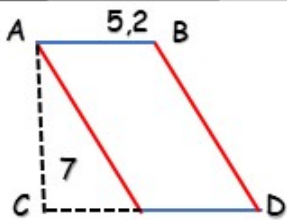
2



108

10,8

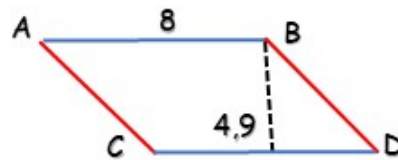
18,5



364

36,4

3,64



39,2

3,92

392

How Did You Do? 😊 😐 ☹️