




NAME: \_\_\_\_\_

# AREA OF TRIANGLES

Instructions: Multiply the base by the height and divide the result by two.

<p>a) A triangle has the following base and height:</p> <ul style="list-style-type: none"><li>• Base 34cm</li><li>• Height 30cm</li></ul>	<p>Solution:</p> 
---	--

<p>b) A triangle has the following base and height:</p> <ul style="list-style-type: none"><li>• Base 18cm</li><li>• Height 12cm</li></ul>	<p>Solution:</p> 
---	--

<p>c) A triangle has the following base and height:</p> <ul style="list-style-type: none"><li>• Base 28cm</li><li>• Height 14cm</li></ul>	<p>Solution:</p> 
---	--

TRIANGLES

How Did You Do? 😊 😐 ☹️