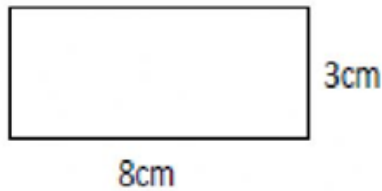


NAME: _____

AREA OF A RECTANGLE

Work out the area of the following rectangles. They are not to scale.

1)



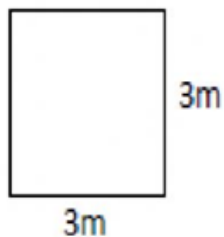
Area = 24 square cm

2)




Area = 35 square ft

3)



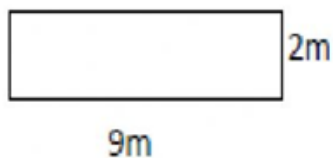
Area = 9 square m

4)



Area = 40 square in

5)



Area = 18 square m

6)



Area = 40 square cm

How Did You Do? 😊 😐 ☹️