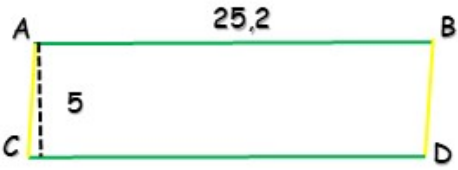
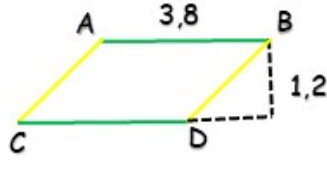
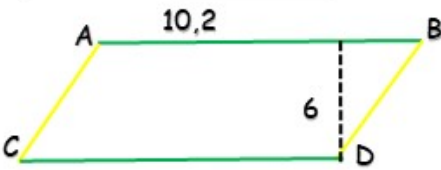

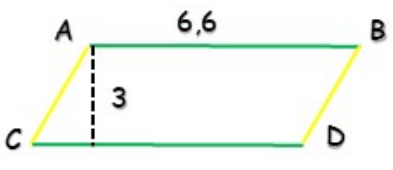
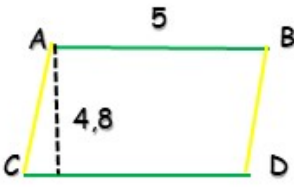


# ANSWERS

## AREA OF PARALLELOGRAM

Instructions calculate the area of the parallelogram, coloring the correct answer:

 <p>25,2 5</p>	 <p>3,8 1,2</p>
<input type="checkbox"/> 1,26 <input type="checkbox"/> 12,6 <input checked="" type="checkbox"/> 126	<input type="checkbox"/> 45,6 <input checked="" type="checkbox"/> 4,56 <input type="checkbox"/> 456
 <p>10,2 6</p>	 <p>7 1,5</p>
<input type="checkbox"/> 612 <input type="checkbox"/> 6,12 <input checked="" type="checkbox"/> 61,2	<input checked="" type="checkbox"/> 10,5 <input type="checkbox"/> 105 <input type="checkbox"/> 1,05
 <p>6,6 3</p>	 <p>5 4,8</p>
<input checked="" type="checkbox"/> 19,8 <input type="checkbox"/> 1,98 <input type="checkbox"/> 198	<input type="checkbox"/> 2,4 <input type="checkbox"/> 4,2 <input checked="" type="checkbox"/> 24

How Did You Do? 😊 😐 😞