




## ANSWERS

# AREA OF SQUARES

**Instructions:** Find the area of the square by multiplying side by side and express the result with exponent 2:

a) Each side of the square is 8cm	Solution: $8 \text{ cm} * 8 \text{ cm} = 64\text{cm}^2$ Area= <input type="text" value="64cm2"/>	
-----------------------------------	--	---

b) Each side of the square is 54m	Solution: $54 \text{ m} * 54 \text{ m} = 2916\text{m}^2$ Area= <input type="text" value="2916m2"/>	
-----------------------------------	--	--

c) Each side of the square is 62km	Solution: $62 \text{ km} * 62 \text{ km} = 3844\text{km}^2$ Area= <input type="text" value="3844km2"/>	
------------------------------------	--	---

SQUARES

How Did You Do? 😊 😐 😞