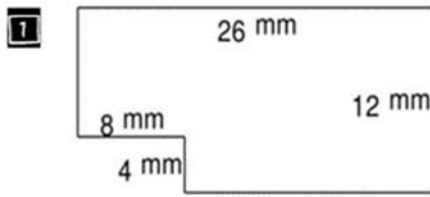


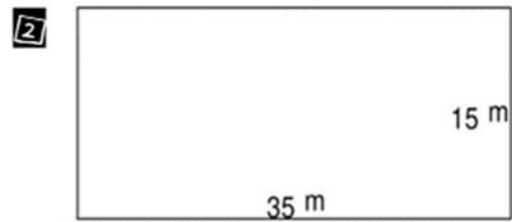
NAME: -----

## FINDING AREA OF IRREGULAR SHAPES


Find the area and perimeter of the following rectangular shapes.



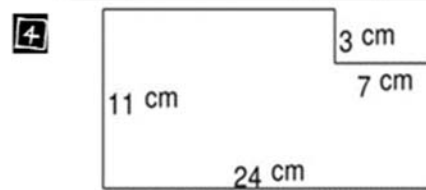
280 mm<sup>2</sup>



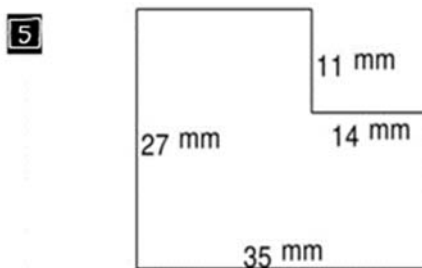
525 m<sup>2</sup>



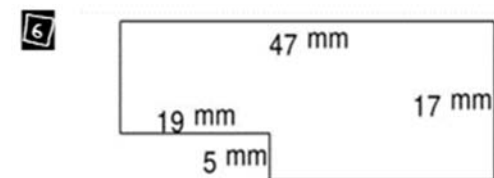
330 m<sup>2</sup>



243 cm<sup>2</sup>



791 mm<sup>2</sup>



704 mm<sup>2</sup>

How Did You Do? 😊 😐 😞