




ANSWERS

AREA OF SQUARES

Instructions: Find the area of the square by multiplying side by side and express the result with exponent 2:

a) Each side of the square is 2cm	Solution: $2 \text{ cm} * 2 \text{ cm} = 4\text{cm}^2$ Area= <input type="text" value="4cm2"/>	
-----------------------------------	--	---

b) Each side of the square is 37m	Solution: $37 \text{ m} * 37 \text{ m} = 1369\text{m}^2$ Area= <input type="text" value="1369m2"/>	
-----------------------------------	--	--

c) Each side of the square is 41km	Solution: $41 \text{ km} * 41 \text{ km} = 1681\text{km}^2$ Area= <input type="text" value="1681km2"/>	
------------------------------------	--	---

SQUARES

How Did You Do? 😊 😐 😞