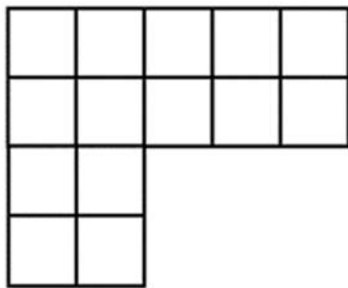


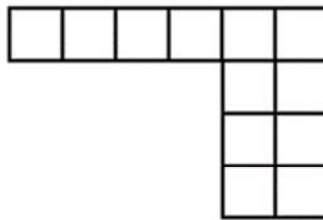
NAME: _____

FINDING AREA OF IRREGULAR SHAPES

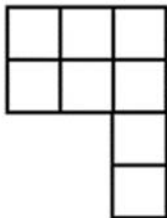
Directions: Determine the area of each shape by counting the blocks inside each shape.



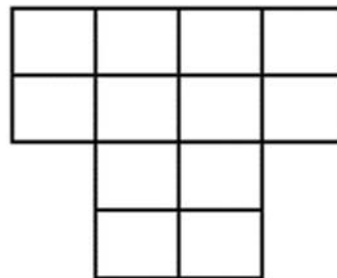
The area of this shape is
14 cubic cm.



The area of this shape is
12 cubic ft.



The area of this shape is
8 cubic in.



The area of this shape is
12 cubic m.

How Did You Do? 😊 😐 ☹️