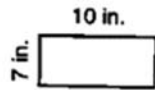


NAME: _____

AREA OF A RECTANGLE

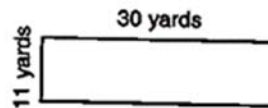
Directions: Compute the area of each rectangle.

1.



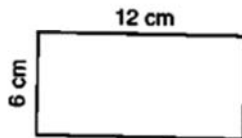
$$70 \text{ in}^2$$

5.



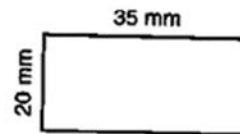
$$330 \text{ yards}^2$$

2.



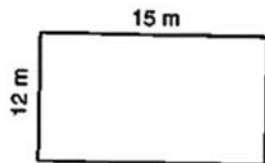
$$72 \text{ cm}^2$$

6.



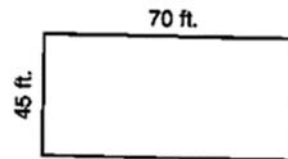
$$700 \text{ mm}^2$$

3.



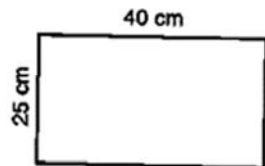
$$180 \text{ m}^2$$

7.



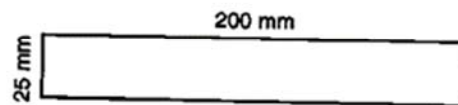
$$3,150 \text{ ft}^2$$

4.



$$1,000 \text{ cm}^2$$

8.



$$5,000 \text{ mm}^2$$

How Did You Do? 😊 😐 😞