




ANSWERS

AREA OF TRIANGLES

Instructions: Multiply the base by the height and divide the result by two.

<p>a) A triangle has the following base and height:</p> <ul style="list-style-type: none">• Base 2cm• Height 11cm	<p>Solution:</p>  <p>$2 \text{ cm} * 11 \text{ cm} = 22\text{cm} / 2 = 11\text{cm}$</p> <p>Area= <input type="text" value="11cm"/></p>
--	--

<p>b) A triangle has the following base and height:</p> <ul style="list-style-type: none">• Base 2cm• Height 13cm	<p>Solution:</p>  <p>$2 \text{ cm} * 13 \text{ cm} = 26\text{cm} / 2 = 13\text{cm}$</p> <p>Area= <input type="text" value="13cm"/></p>
--	---

<p>c) A triangle has the following base and height:</p> <ul style="list-style-type: none">• Base 2cm• Height 15cm	<p>Solution:</p>  <p>$2 \text{ cm} * 15 \text{ cm} = 30\text{cm} / 2 = 15\text{cm}$</p> <p>Area= <input type="text" value="15cm"/></p>
--	--

TRIANGLES

How Did You Do? 😊 😐 😞