


ANSWERS


AREA OF SQUARES

Instructions: Find the area of the square by multiplying side by side and express the result with exponent 2:


a) Each side of the square is 5cm	Solution: $5 \text{ cm} * 5 \text{ cm} = 25\text{cm}^2$ Area= <input type="text" value="25cm2"/>
-----------------------------------	--



b) Each side of the square is 29m	Solution: $29 \text{ m} * 29 \text{ m} = 841\text{m}^2$ Area= <input type="text" value="841m2"/>
-----------------------------------	--



c) Each side of the square is 33km	Solution: $33 \text{ km} * 33 \text{ km} = 1089\text{km}^2$ Area= <input type="text" value="1089km2"/>
------------------------------------	--



SQUARES

How Did You Do? 😊 😐 😞