




NAME: _____

AREA OF TRIANGLES

Instructions: Multiply the base by the height and divide the result by two.

<p>a) A triangle has the following base and height:</p> <ul style="list-style-type: none">• Base 2cm• Height 11cm	<p>Solution:</p> 
--	--

<p>b) A triangle has the following base and height:</p> <ul style="list-style-type: none">• Base 2cm• Height 13cm	<p>Solution:</p> 
--	--

<p>c) triangle has the following base and height:</p> <ul style="list-style-type: none">• Base 2cm• Height 15cm	<p>Solution:</p> 
--	--

TRIANGLES

How Did You Do? 😊 😐 ☹️