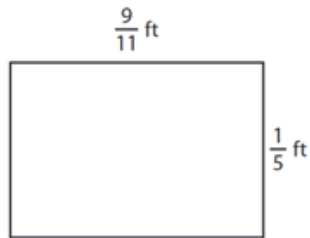


NAME: _____

AREA OF A RECTANGLE


Find the area of each rectangle.

1)



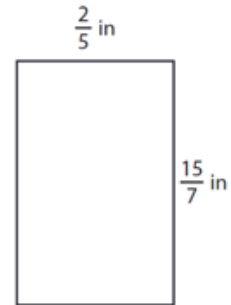
Area = $9/55$ ft²

2)



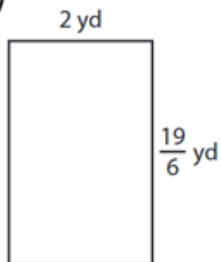
Area = 12 yd²

3)



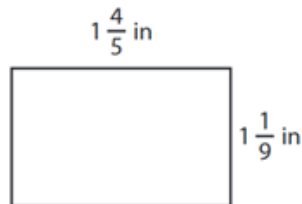
Area = $6/7$ in²

4)




Area = $6 \frac{1}{3}$ yd²

5)



Area = 2 in²

6)



Area = $5 \frac{5}{6}$ ft²



How Did You Do? 😊 😐 ☹️