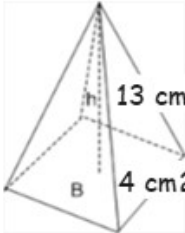
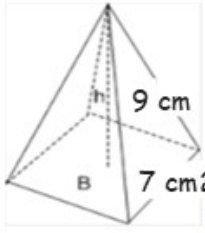
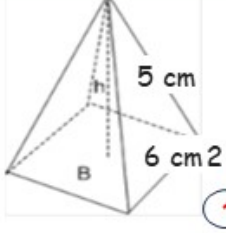
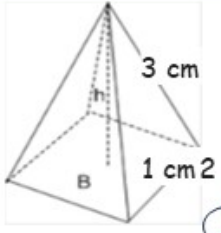


## ANSWERS

# VOLUME OF MIXED PYRAMIDS

**Instructions** Find the volume of the pyramids, and join the image with its result with a line:

 <p>h 13 cm B 4 cm<sup>2</sup></p>	<input type="radio"/>	1 cm <sup>3</sup>
 <p>h 9 cm B 7 cm<sup>2</sup></p>	<input type="radio"/>	60 cm <sup>3</sup>
 <p>h 5 cm B 6 cm<sup>2</sup></p>	<input type="radio"/>	147 cm <sup>3</sup>
 <p>h 3 cm B 1 cm<sup>2</sup></p>	<input type="radio"/>	69.3 cm <sup>3</sup>

Red lines connect the radio buttons in the first column to the radio buttons in the second column, indicating the correct matches for each pyramid's volume.

How Did You Do? 😊 😐 😞