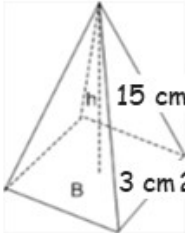
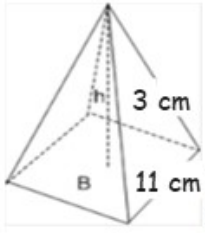
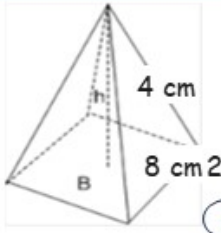
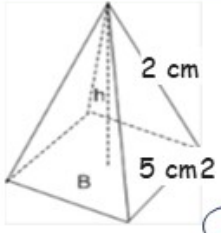


ANSWERS

VOLUME OF MIXED PYRAMIDS

Instructions Find the volume of the pyramids, and join the image with its result with a line:

 <p>h 15 cm B 3 cm²</p>	<input type="radio"/>	45 cm ³
 <p>h 3 cm B 11 cm²</p>	<input type="radio"/>	121 cm ³
 <p>h 4 cm B 8 cm²</p>	<input type="radio"/>	85.3 cm ³
 <p>h 2 cm B 5 cm²</p>	<input type="radio"/>	16.6 cm ³

How Did You Do? 😊 😐 😞