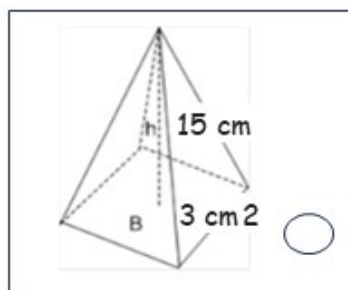


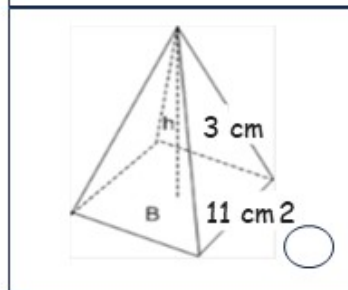
NAME: _____

VOLUME OF MIXED PYRAMIDS

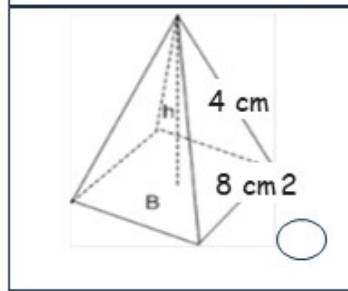
Instructions Find the volume of the pyramids, and join the image with its result with a line:



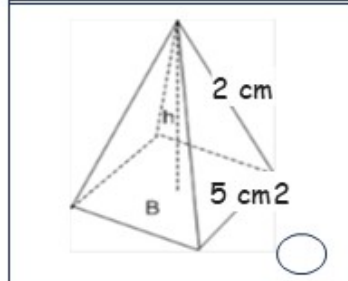
45 cm³



121 cm³



85.3 cm³



16.6 cm³

How Did You Do? 😊 😐 😞