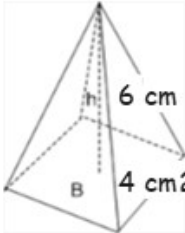
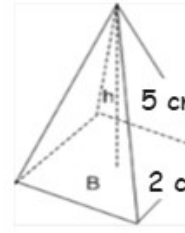
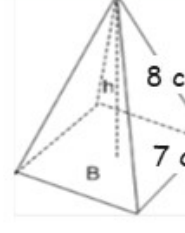
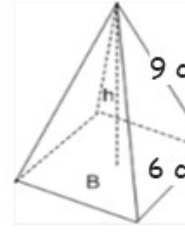


ANSWERS

VOLUME OF MIXED PYRAMIDS

Instructions Find the volume of the pyramids, and join the image with its result with a line:

	<input type="radio"/>	6.66 cm ³
	<input type="radio"/>	130.6 cm ³
	<input type="radio"/>	32 cm ³
	<input type="radio"/>	108 cm ³

Red lines connect the pyramids to their correct volume results: (6 cm, 4 cm²) to 130.6 cm³, (5 cm, 2 cm²) to 6.66 cm³, (8 cm, 7 cm²) to 108 cm³, and (9 cm, 6 cm²) to 32 cm³.

How Did You Do? 😊 😐 😞