

NAME: _____

AREA OF A RECTANGLE

A) Find the area of each rectangle for the given measurements.

1) length = 10 ft, width = 8 ft

Area = 80 ft²

2) width = 4 yd, length = 7 yd

Area = 28 yd²

3) width = 9 in, length = 12 in

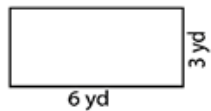
Area = 108 in²

4) length = 16 ft, width = 11 ft

Area = 176 ft²


B) Find the area of each rectangle.

5)




Area = 18 yd²

6)



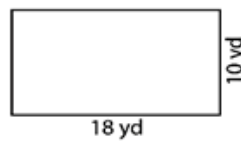
Area = 112 in²

7)



Area = 10 ft²

8)



Area = 180 yd²

9) The length and width of a rectangle are 4 inches and 3 inches respectively. Determine the area of the rectangle.

12 in²

How Did You Do? 😊 😐 ☹️