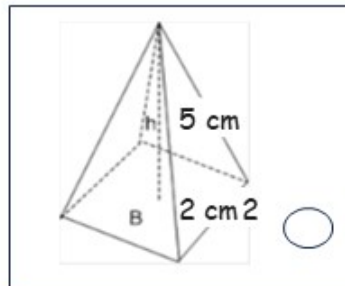


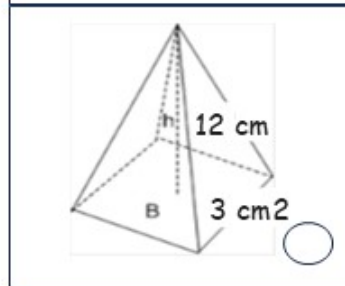
NAME: \_\_\_\_\_

# VOLUME OF MIXED PYRAMIDS

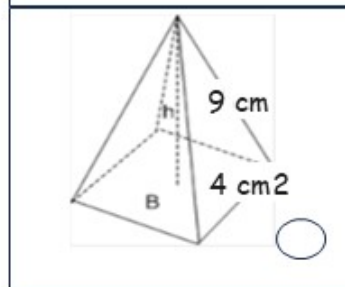
**Instructions** Find the volume of the pyramids, and join the image with its result with a line:



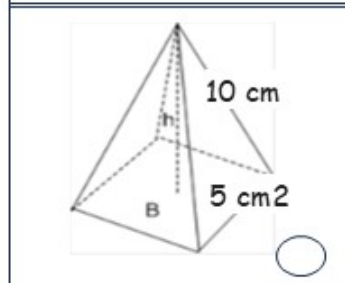
48 cm<sup>3</sup>



83.3 cm<sup>3</sup>



6.6 cm<sup>3</sup>



36 cm<sup>3</sup>

How Did You Do? 😊 😐 😞