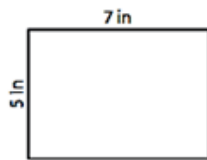


NAME: _____

AREA OF A RECTANGLE


Find the area of each rectangle.

1)




Area = 35 in^2

2)



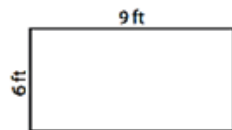
Area = 18 ft^2

3)




Area = 32 yd^2

4)




Area = 54 ft^2

5)



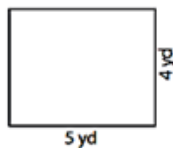
Area = 30 yd^2

6)



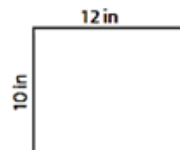
Area = 45 in^2

7)




Area = 20 yd^2

8)



Area = 120 in^2

9)



Area = 105 ft^2

How Did You Do? 😊 😐 ☹️