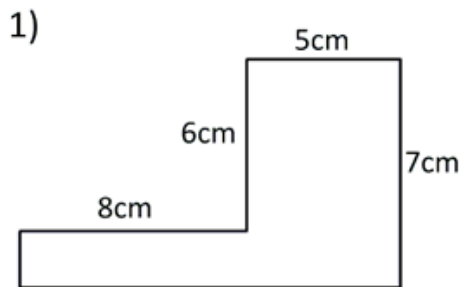


t

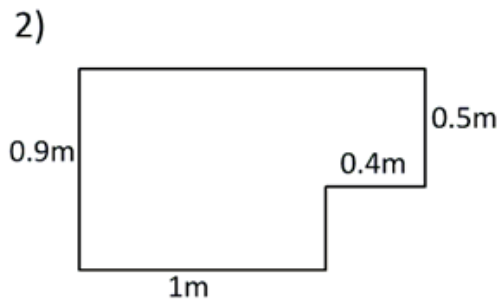
NAME: -----

## FINDING AREA OF IRREGULAR SHAPES

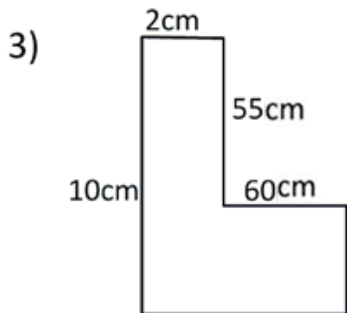
Work out the area and perimeter of the following shapes by finding the missing sides and dividing the shapes into rectangles. Not to scale.



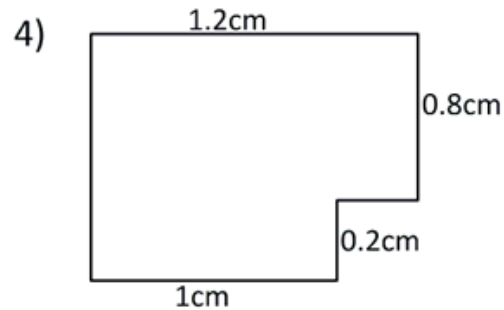
Area = 43 square cm (cm<sup>2</sup>)  
Perimeter = 40 cm



Area = 1.1 square m (m<sup>2</sup>)  
Perimeter = 4.6 m



Area = 43 square cm (cm<sup>2</sup>)  
Perimeter = 40 cm



Area = 1.4 square cm (cm<sup>2</sup>)  
Perimeter = 4.4 cm

How Did You Do? 😊 😐 😞