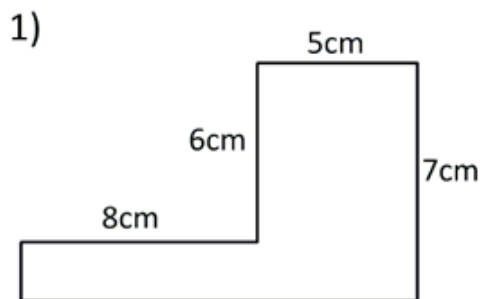


NAME: _____

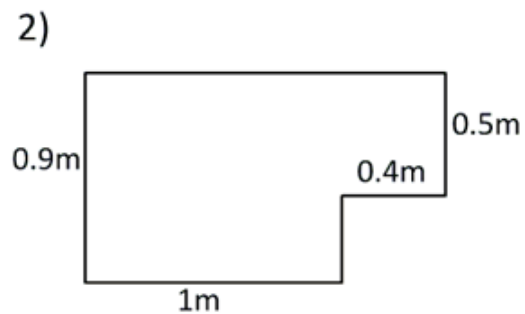
FINDING AREA OF IRREGULAR SHAPES

Work out the area and perimeter of the following shapes by finding the missing sides and dividing the shapes into rectangles. Not to scale.



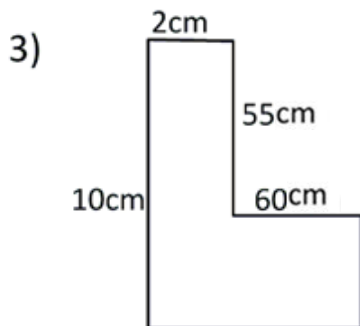
Area = _____ square cm (cm²)

Perimeter = _____ cm



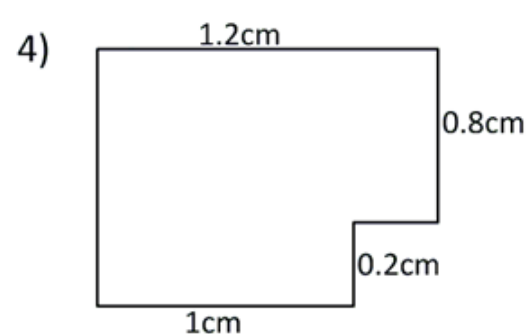
Area = _____ square m (m²)

Perimeter = _____ m



Area = _____ square cm (cm²)

Perimeter = _____ cm



Area = _____ square cm (cm²)

Perimeter = _____ cm

How Did You Do? 😊 😐 ☹️