




ANSWERS

AREA OF TRIANGLES

Instructions: Multiply the base by the height and divide the result by two:

| | |
|---|--|
| <p>a) A triangle has the following base and height:</p> <ul style="list-style-type: none">• Base 2cm• Height 3cm | <p>Solution:</p> $2 \text{ cm} * 3 \text{ cm} = 6\text{cm} / 2 = 3\text{cm}$ <p>Area= <input type="text" value="3cm"/></p>  |
|---|--|

| | |
|---|---|
| <p>b) A triangle has the following base and height:</p> <ul style="list-style-type: none">• Base 3cm• Height 4cm | <p>Solution:</p> $3 \text{ cm} * 4 \text{ cm} = 12\text{cm} / 2 = 6\text{cm}$ <p>Area= <input type="text" value="6cm"/></p>  |
|---|---|

| | |
|---|---|
| <p>c) A triangle has the following base and height:</p> <ul style="list-style-type: none">• Base 4cm• Height 5cm | <p>Solution:</p> $4 \text{ cm} * 5 \text{ cm} = 20\text{cm} / 2 = 10\text{cm}$ <p>Area= <input type="text" value="10cm"/></p>  |
|---|---|

TRIANGLES

How Did You Do? 😊 😐 😞