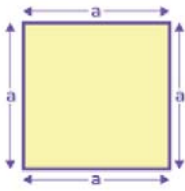


Name :

Class :

## Perimeter of Squares and Rectangles



Perimeter of square (P)  
 $= 4 \times \text{Side} = 4 \times a$

The formula for the perimeter of squares is  $P = 4 \times \text{side}$ . and The formula for the perimeter of rectangle  $p = 2(L + W)$ .

Perimeter of a Rectangle

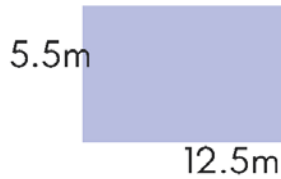


Formula:

$$P = 2L + 2W$$

Find the perimeter of each rectangle.

1)



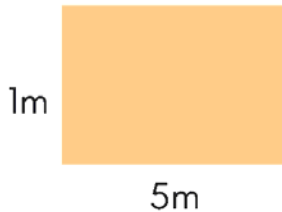
$$P = 36m$$

2)




$$P = 26m$$

3)



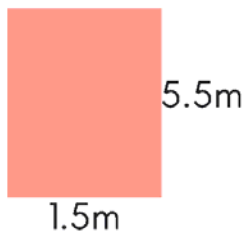
$$P = 12m$$

4)




$$P = 26m$$

5)



$$P = 14m$$

6)



$$P = 20.4m$$