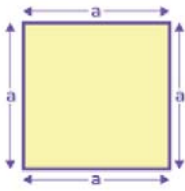


Name :

Class :

Perimeter of Squares and Rectangles



Perimeter of square (P)
 $= 4 \times \text{Side} = 4 \times a$

The formula for the perimeter of squares is $P = 4 \times \text{side}$. and The formula for the perimeter of rectangle $p = 2(L + W)$.

Perimeter of a Rectangle



Formula:

$$P = 2L + 2W$$

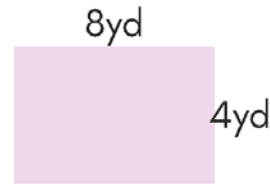
Find the perimeter of each rectangle.

1)



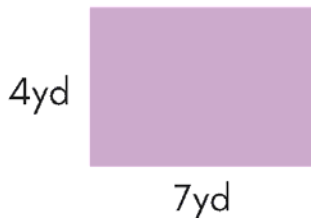
$$P = 34\text{yd}$$

2)



$$P = 24\text{yd}$$

3)



$$P = 22\text{yd}$$

4)



$$P = 20\text{yd}$$

5)



$$P = 28\text{yd}$$

6)



$$P = 26\text{yd}$$