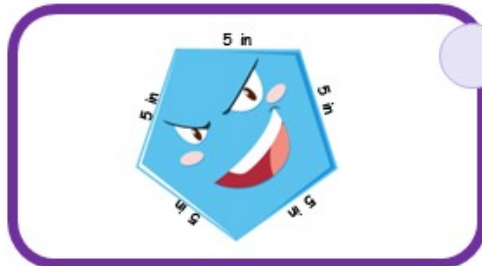
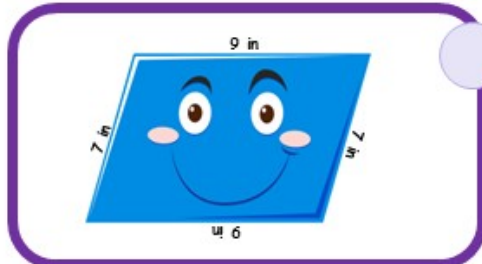



Name _____

ANSWERS

PERIMETER OF COMPOSITE SHAPES

Instructions: Calculate the perimeter of the following Composite Shapes, and with a line join the figure with the answer.



28

25

24

32

How Did You Do? 😊 😐 😞