



Name \_\_\_\_\_


NAME: \_\_\_\_\_

## PERIMETER OF TRAPEZOIDS

Instructions: Add the lengths of the four sides to find the perimeter of each trapezoid.

<p>a) A trapezoid has the following sides:</p> <ul style="list-style-type: none"><li>• Top side: 9 cm</li><li>• Bottom side: 15 cm</li><li>• Left side: 6 cm</li><li>• Right side: 6 cm</li></ul>	<p>Solution:</p> 
---	--

<p>b) A trapezoid has the following sides:</p> <ul style="list-style-type: none"><li>• Top side: 11 cm</li><li>• Bottom side: 17 cm</li><li>• Left side: 7 cm</li><li>• Right side: 7 cm</li></ul>	<p>Solution:</p> 
--	---

<p>c) A trapezoid has the following sides:</p> <ul style="list-style-type: none"><li>• Top side: 13 cm</li><li>• Bottom side: 19 cm</li><li>• Left side: 10 cm</li><li>• Right side: 9 cm</li></ul>	<p>Solution:</p> 
---	--

TRAPEZOID

How Did You Do?

