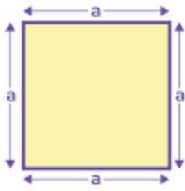


Name :

Class :

## Perimeter of Squares and Rectangles



Perimeter of square (P)  
 $= 4 \times \text{Side} = 4 \times a$

The formula for the perimeter of squares is  $P = 4 \times \text{side}$ . and The formula for the perimeter of rectangle  $p = 2(L + W)$ .

Perimeter of a Rectangle




Formula:

$$P = 2L + 2W$$


Find the perimeter of each square and rectangle.

1)



$$P = 12m$$

2)




$$P = 26m$$

3)




$$P = 18.0m$$

4)



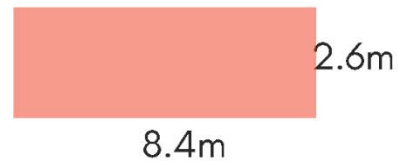
$$P = 28m$$

5)



$$P = 20m$$

6)



$$P = 22m$$