


Name \_\_\_\_\_


NAME: \_\_\_\_\_

# PERIMETER OF QUADRILATERALS

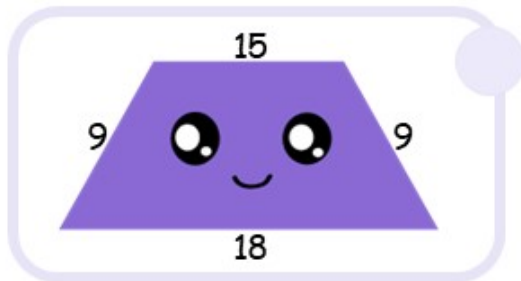
Instructions: Calculate the perimeter of the following trapezoids, and with a line join the figure with the answer.



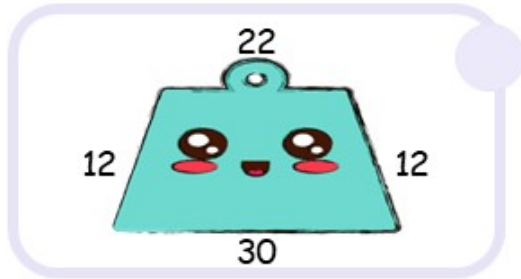
44



76



51



32

How Did You Do? 😊 😐 ☹️