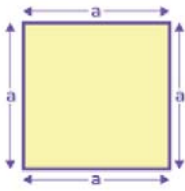


Name :

Class :

## Perimeter of Squares and Rectangles



Perimeter of square (P)  
 $= 4 \times \text{Side} = 4 \times a$

The formula for the perimeter of squares is  $P = 4 \times \text{side}$ . and The formula for the perimeter of rectangle  $p = 2(L + W)$ .

Perimeter of a Rectangle




Formula:

$$P = 2L + 2W$$


Find the perimeter of each square and rectangle.

1)




$$P = 72\text{m}$$

2)



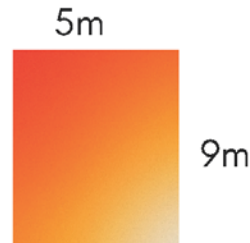
$$P = 20.0\text{m}$$

3)



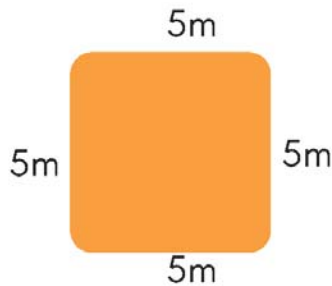
$$P = 48\text{m}$$

4)



$$P = 28\text{m}$$

5)



$$P = 20\text{m}$$

6)



$$P = 18\text{m}$$