



Name _____


NAME: _____

PERIMETER OF TRAPEZOIDS

Instructions: Add the lengths of the four sides to find the perimeter of each trapezoid.

<p>a) A trapezoid has the following sides:</p> <ul style="list-style-type: none">• Top side: 6 cm• Bottom side: 10 cm• Left side: 4 cm• Right side: 4 cm	<p>Solution:</p> 
---	--

<p>b) A trapezoid has the following sides:</p> <ul style="list-style-type: none">• Top side: 8 cm• Bottom side: 12 cm• Left side: 7 cm• Right side: 7 cm	<p>Solution:</p> 
---	---

<p>c) A trapezoid has the following sides:</p> <ul style="list-style-type: none">• Top side: 9 cm• Bottom side: 14 cm• Left side: 6 cm• Right side: 5 cm	<p>Solution:</p> 
---	--

TRAPEZOID

How Did You Do? 