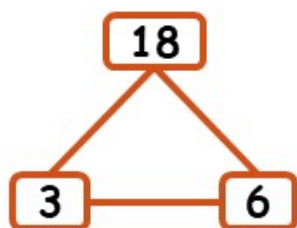


Name _____

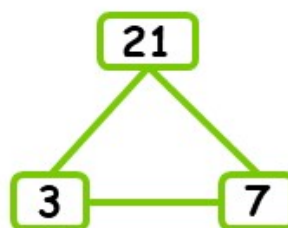
ANSWERS

WORKSHEET 12

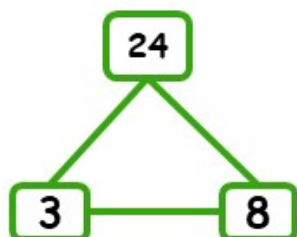
Use the triangle to find 1 multiplication and 2 division sentences using the same digits in the triangle.



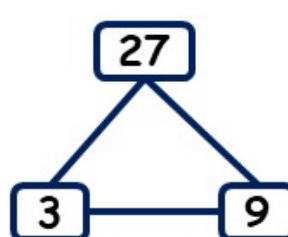
$$\begin{array}{l} 6 \times 3 = 18 \\ 18 \div 6 = 3 \\ 18 \div 3 = 6 \end{array}$$



$$\begin{array}{l} 7 \times 3 = 21 \\ 21 \div 7 = 3 \\ 21 \div 3 = 7 \end{array}$$



$$\begin{array}{l} 8 \times 3 = 24 \\ 24 \div 8 = 3 \\ 24 \div 3 = 8 \end{array}$$



$$\begin{array}{l} 9 \times 3 = 27 \\ 27 \div 9 = 3 \\ 27 \div 3 = 9 \end{array}$$

How Did You Do? 😊 😐 😞