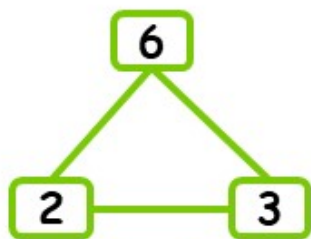


Name _____

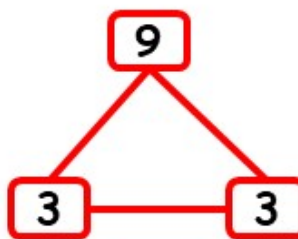
NAME: -----

WORKSHEET 11

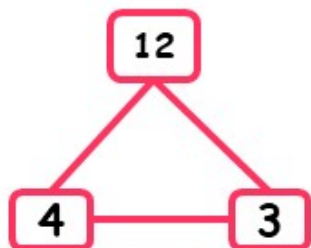
Use the triangle to find 1 multiplication and 2 division sentences using the same digits in the triangle.



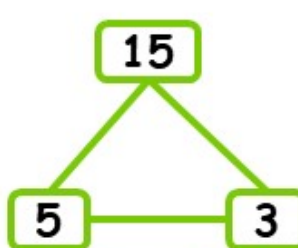
$$\begin{array}{l} \square \times \square = \square \\ \square \div \square = \square \\ \square \div \square = \square \end{array}$$



$$\begin{array}{l} \square \times \square = \square \\ \square \div \square = \square \\ \square \div \square = \square \end{array}$$



$$\begin{array}{l} \square \times \square = \square \\ \square \div \square = \square \\ \square \div \square = \square \end{array}$$



$$\begin{array}{l} \square \times \square = \square \\ \square \div \square = \square \\ \square \div \square = \square \end{array}$$

How Did You Do?

