




Name \_\_\_\_\_

## ANSWERS

# USING SHAPES TO REPRESENT THE RATIO

Instructions: Match with a line the correct answer to the proportion



Answer  
(A|B)

(6|7)

(4|4)

(3|3)

How Did You Do? 😊 😐 😞