


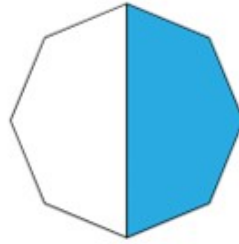
NAME: _____

FINDING THE PARTS FROM THE WHOLE

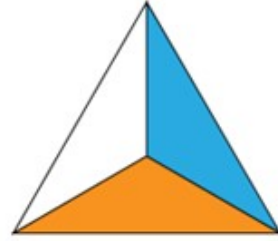
Instructions: Write down the fraction that represents the shaded part.



Answer:



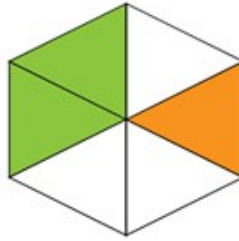
Answer:



Answer:



Answer:



Answer:



Answer:



Answer:



Answer:



Answer:

How Did You Do? 😊 😐 😞