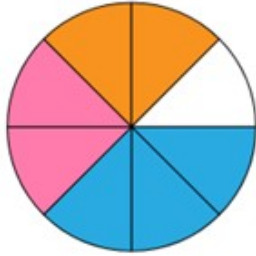


NAME: _____

FINDING THE PARTS FROM THE WHOLE

Instructions: Write down the fraction that represents the shaded part.



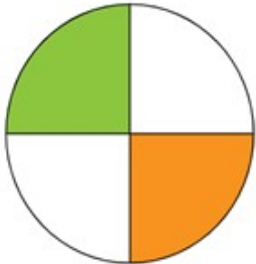
Answer:



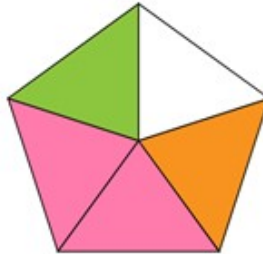
Answer:



Answer:



Answer:



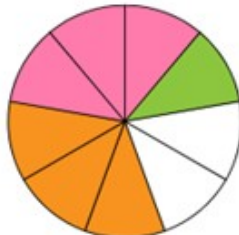
Answer:



Answer:



Answer:



Answer:



Answer:

How Did You Do?

