





NAME: _____

FINDING THE PARTS FROM THE WHOLE



Instructions: Identify and circle the fraction that represents the shaded portion.



a) $\frac{3}{8}$
b) $\frac{2}{8}$
c) $\frac{4}{8}$



a) $\frac{6}{8}$
b) $\frac{5}{8}$
c) $\frac{4}{8}$



a) $\frac{2}{8}$
b) $\frac{4}{9}$
c) $\frac{4}{8}$

a) $\frac{6}{8}$
b) $\frac{5}{8}$
c) $\frac{4}{8}$

a) $\frac{6}{8}$
b) $\frac{2}{8}$
c) $\frac{5}{8}$

a) $\frac{5}{8}$
b) $\frac{4}{8}$
c) $\frac{7}{8}$

How Did You Do? 