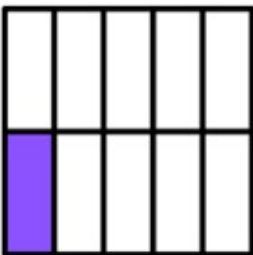


NAME: _____

FINDING THE PARTS FROM THE WHOLE


Instructions: Identify and circle the fraction that represents the shaded portion.

A




a) $\frac{1}{10}$
b) $\frac{2}{10}$
c) $\frac{1}{9}$

B



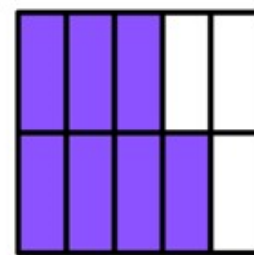
a) $\frac{3}{8}$
b) $\frac{5}{10}$
c) $\frac{5}{8}$

C



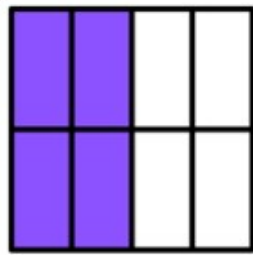
a) $\frac{2}{6}$
b) $\frac{3}{6}$
c) $\frac{4}{5}$

D



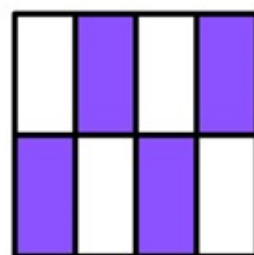
a) $\frac{7}{10}$
b) $\frac{8}{10}$
c) $\frac{5}{10}$

E



a) $\frac{6}{10}$
b) $\frac{4}{10}$
c) $\frac{4}{8}$

F



a) $\frac{6}{8}$
b) $\frac{4}{8}$
c) $\frac{8}{8}$

How Did You Do? 😊 😐 ☹️