

ANSWERS

ADDING DOUBLES

Count and complete each double operation.

1




$$\underline{3} + \underline{3} = \underline{6}$$

4




$$\underline{5} + \underline{5} = \underline{10}$$

2




$$\underline{2} + \underline{2} = \underline{4}$$

5




$$\underline{4} + \underline{4} = \underline{8}$$

3



$$\underline{9} + \underline{9} = \underline{18}$$

6



$$\underline{6} + \underline{6} = \underline{12}$$

How Did You Do? 😊 😐 😞