

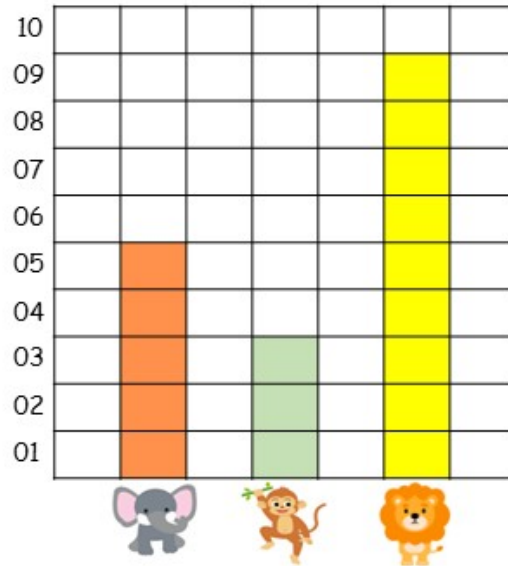
Name _____




ANSWERS

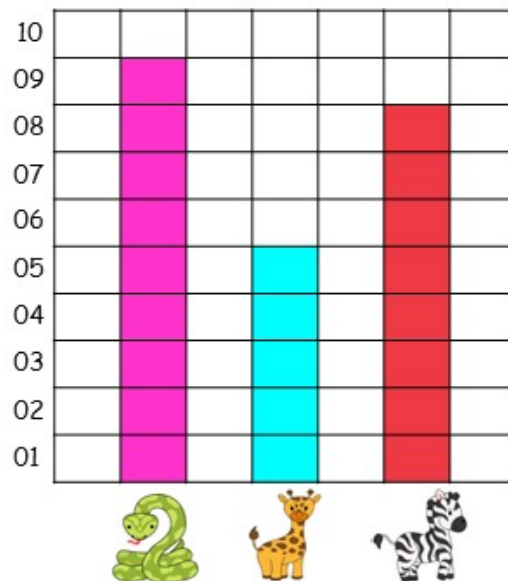
TRIPLE BAR GRAPH

Read the bar graphs, count the squares, and write down how many elements there are of each type.

jungle animals	How many?
	<u>5</u>
	<u>3</u>
	<u>9</u>



jungle animals	How many?
	<u>9</u>
	<u>5</u>
	<u>8</u>



How Did You Do? 😊 😐 ☹️