

NAME: \_\_\_\_\_

# ADDING DOUBLES

Count and complete each double operation.

1




$$\underline{\quad} + \underline{\quad} = \underline{\quad}$$

4




$$\underline{\quad} + \underline{\quad} = \underline{\quad}$$

2




$$\underline{\quad} + \underline{\quad} = \underline{\quad}$$

5




$$\underline{\quad} + \underline{\quad} = \underline{\quad}$$

3



$$\underline{\quad} + \underline{\quad} = \underline{\quad}$$

6



$$\underline{\quad} + \underline{\quad} = \underline{\quad}$$

How Did You Do?

