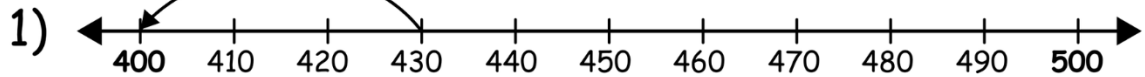


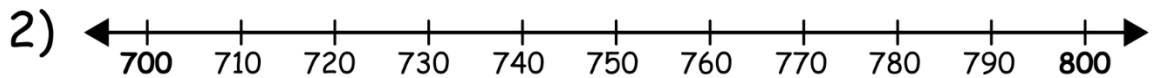
Name _____

Rounding with Number Lines


Use the number lines below to round the three digits numbers to the nearest 100.




430 is nearest to 400.




770 is nearest to _____.



350 is nearest to _____.



660 is nearest to _____.



240 is nearest to _____.